

2. Solve. Show all your work clearly.

- (a) Mrs. Jackson bought 23 dozen pencils. She gave 15 pencils to her students. How many pencils does she have left?
- (b) Josephine bought 6 bags of lollipops. Each bag contained 50 lollipops. She shared them equally with John and Carlos. How many lollipops did John get?

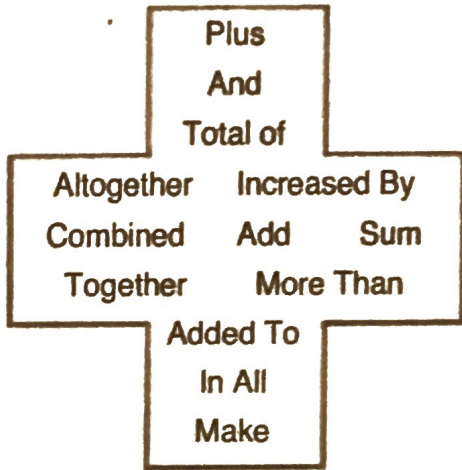
Unit 2 Ex 3.

(c) Book B has 10 times as many pages as Book A. If Book B has 500 pages, how many pages do Book A and Book B have altogether?

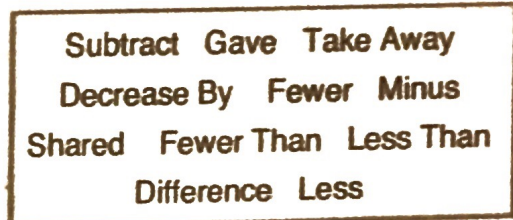
(d) Alex has 1,200 rubber bands. He puts them equally into 10 boxes. How many rubber bands are there altogether in 6 of these boxes?

# Words and Phrases to Math Symbols

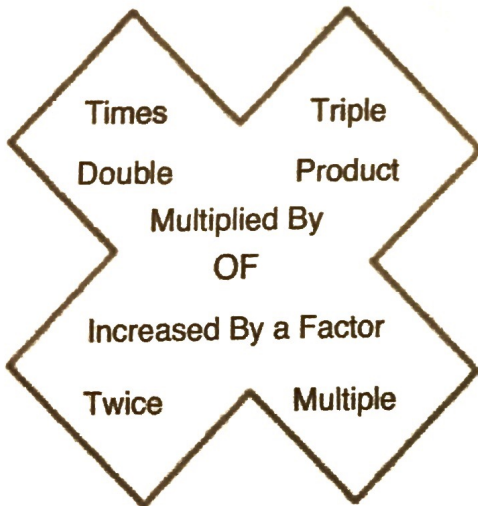
## Addition



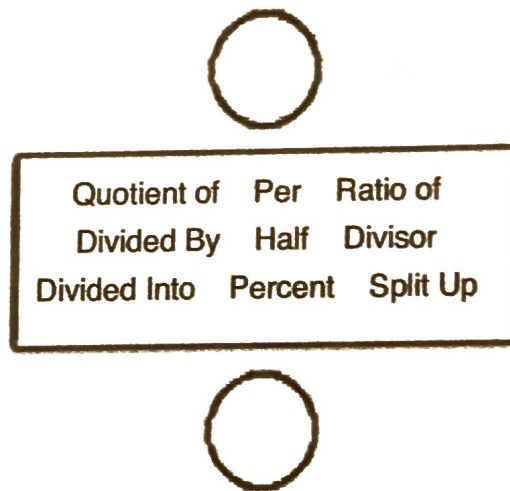
## Subtraction



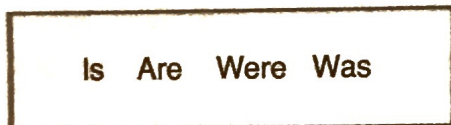
## Multiplication



## Division



## Equals



## Parenthesis Words

